

Algebra I

5.1 Warm-Up #2

Defining Slope

NAME: _____

DATE: _____ HOUR: _____

1. Name five different ways to describe "slope."

a. _____

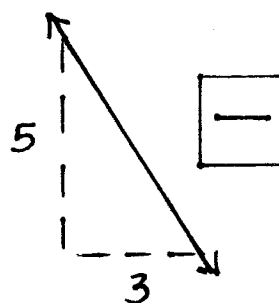
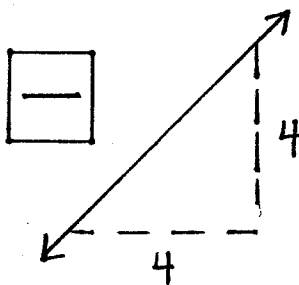
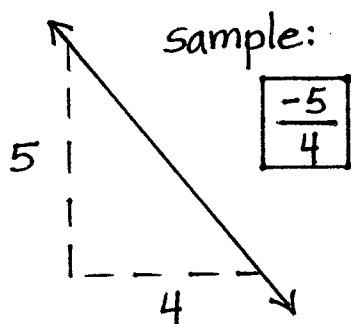
b. _____

c. _____

d. _____

e. _____

2. Find the slope of the following lines:



over

3. Find the slope of the line containing these points:

a. $(-3, 2)$ and $(2, 3)$ _____

d. $(4, 1)$ and $(2, 5)$ _____

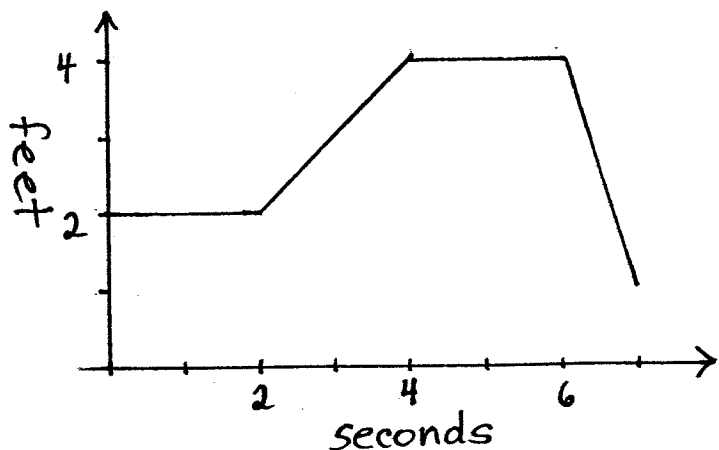
b. $(-5, 4)$ and $(1, 4)$ _____

e. $(-3, -1)$ and $(2, 3)$ _____

c. $(-8, 6)$ and $(1, 3)$ _____

f. $(9, 1)$ and $(1, 7)$ _____

4. Describe how you would "walk this line."



I would stand still for 2
seconds (2 feet away)
then I would

