

Algebra I
Model Assignment
Integer Subtraction

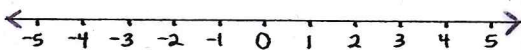
NAME: _____
DATE: _____ HOUR: _____

Draw a number line model AND a tile model for each problem (see Notes 3.2 for examples).
Solve the problem (your answers should match your models).

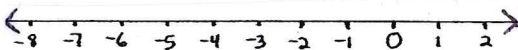
Number Line Model

Tile Model

1. $3 + -5 =$



2. $-2 - 4 =$



Algebra I
Model Assignment
Integer Subtraction

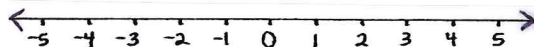
NAME: _____
DATE: _____ HOUR: _____

Draw a number line model AND a tile model for each problem (see Notes 3.2 for examples).
Solve the problem (your answers should match your models).

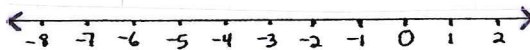
Number Line Model

Tile Model

1. $3 + -5 =$

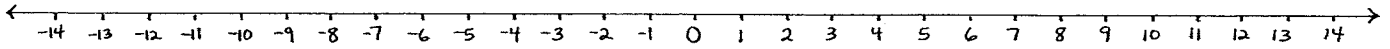


2. $-2 - 4 =$

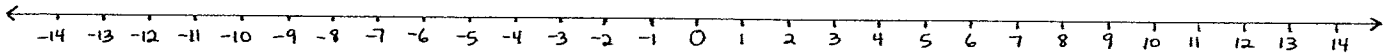


Number Line Models

Addition Problem

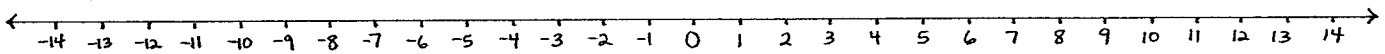


Subtraction Problem



Number Line Models

Addition Problem



Subtraction Problem

