

Find the slope of the line through each pair of points.

9) $(8, 10), (-7, 14)$

10) $(-3, 1), (-17, 2)$

11) $(-20, -4), (-12, -10)$

12) $(-12, -5), (0, -8)$

13) $(-19, -6), (15, 16)$

14) $(-6, 9), (7, -9)$

15) $(-18, -20), (-18, -15)$

16) $(12, -18), (11, 12)$

Find the slope of each line.

17) $y = -5x - 1$

18) $y = \frac{1}{3}x - 4$

19) $y = -\frac{1}{5}x - 4$

20) $x = 1$

21) $y = \frac{1}{4}x + 1$

22) $y = -\frac{2}{3}x - 1$

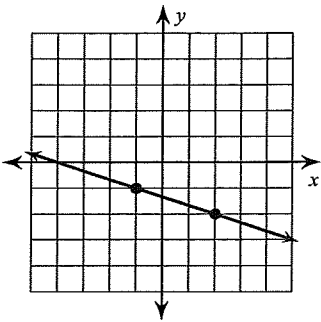
23) $y = -x + 2$

24) $y = -x - 1$

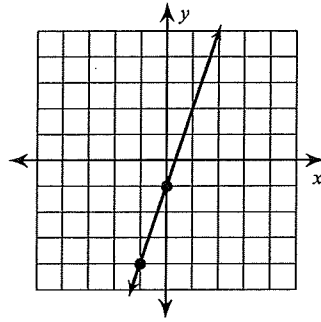
Slope

Find the slope of each line.

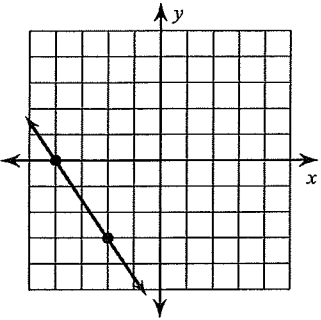
1)



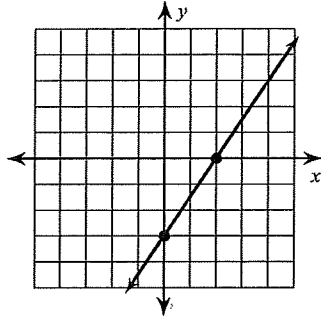
2)



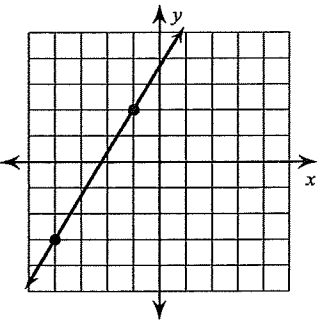
3)



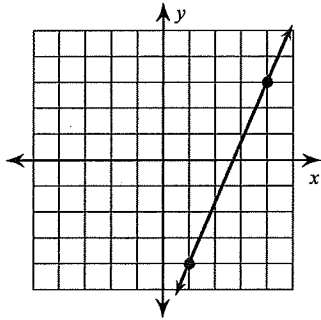
4)



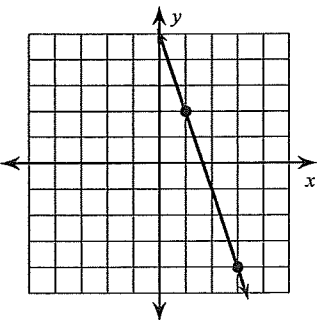
5)



6)



7)



8)

